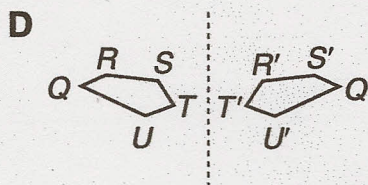
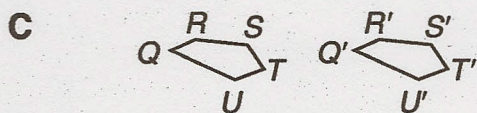
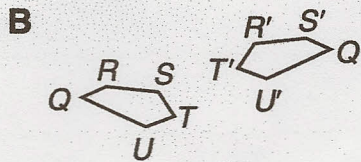
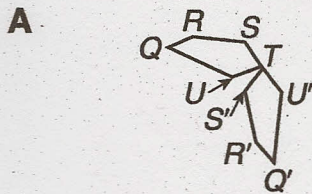
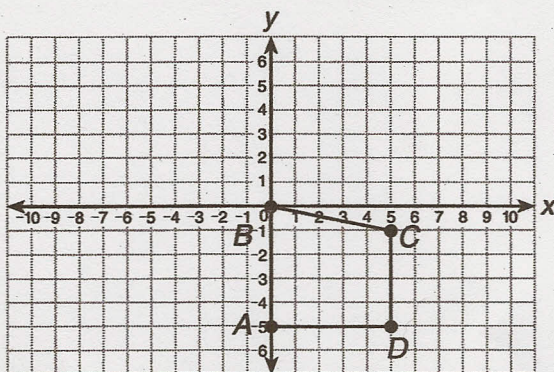


PRACTICE

1 Which shows a rotation?



2 Draw a 180° clockwise rotation of trapezoid $ABCD$ around the origin.



3 Parallelogram $KLMN$ has vertices $K(2, 5)$, $L(7, 5)$, $M(5, 0)$, and $N(0, 0)$. List the coordinates of $K'L'M'N'$ after a 90° clockwise rotation around the origin.

4 The Shark Research Institute, in Princeton, New Jersey, uses a tagging program to estimate populations of whale sharks in different places throughout the world. Which does not show a rotation of a whale shark?

