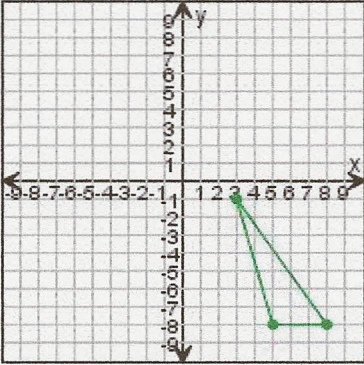


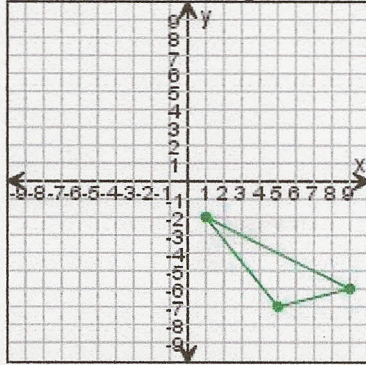
Transformations

Draw the triangle after the transformations.

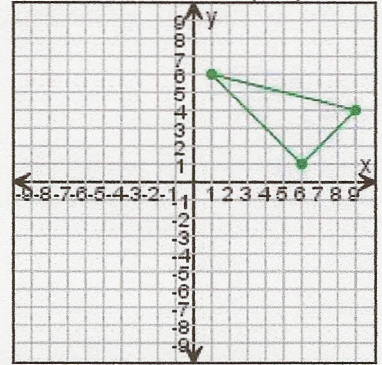
1. Reflect the triangle over the x-axis.



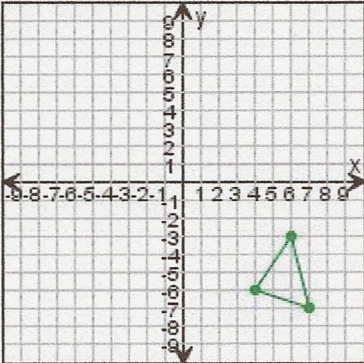
2. Translate the triangle left 1 unit, then 6 units up.



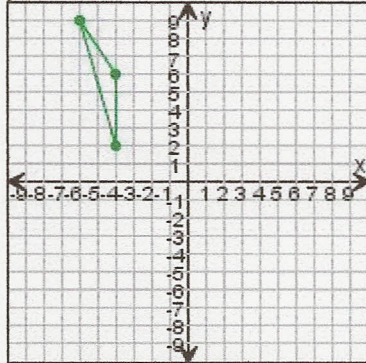
3. Rotate the triangle 180° clockwise around (0,0).



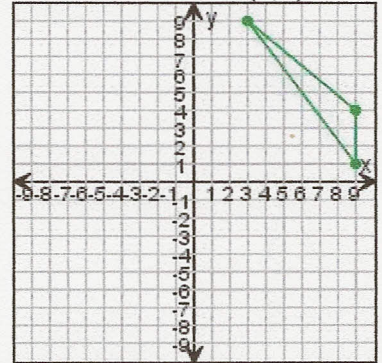
4. Translate the triangle up 8 units, then 6 units left.



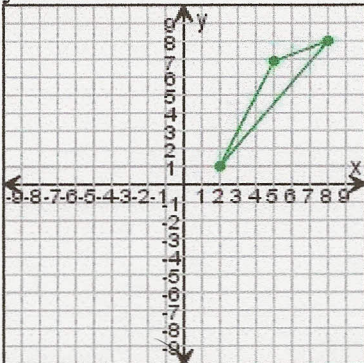
5. Reflect the triangle over the y-axis.



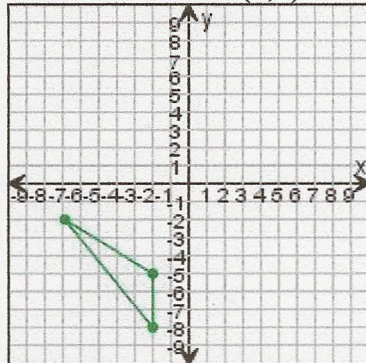
6. Rotate the triangle 90° clockwise around (0,0).



7. Reflect the triangle over the y-axis.



8. Rotate the triangle 180° clockwise around (0,0).



9. Translate the triangle up 4 units, then 1 unit left.

